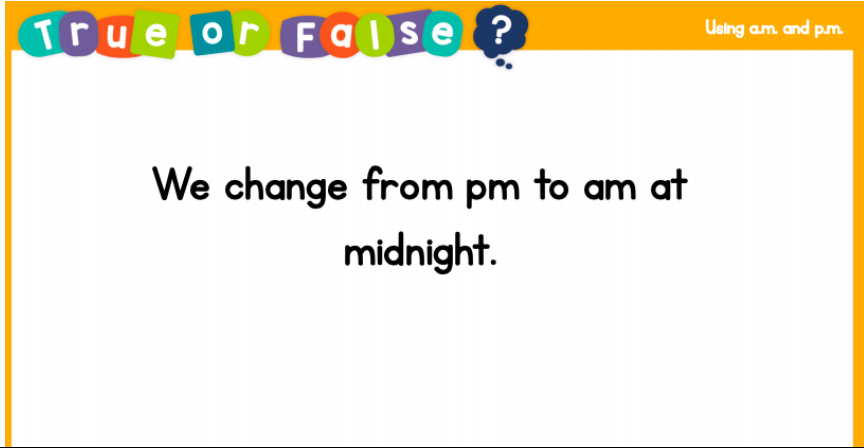


Objective	Task				
<p>We are learning to use a 24-hour clock</p>	<p>Recap it!-</p> <div data-bbox="343 521 1211 967" style="border: 2px solid orange; padding: 10px; text-align: center;">  <p>True or False? <small>Using a.m. and p.m.</small></p> <p>We change from pm to am at midnight.</p> </div> <p>Practise it!-</p> <p>1.</p> <div style="display: flex; flex-wrap: wrap; justify-content: space-around;"> <div style="border: 1px solid gray; border-radius: 10px; padding: 5px; margin: 5px;">06:15</div> <div style="border: 1px solid gray; border-radius: 10px; padding: 5px; margin: 5px;">13:07</div> <div style="border: 1px solid gray; border-radius: 10px; padding: 5px; margin: 5px;">09:29</div> <div style="border: 1px solid gray; border-radius: 10px; padding: 5px; margin: 5px;">19:53</div> <div style="border: 1px solid gray; border-radius: 10px; padding: 5px; margin: 5px;">21:40</div> <div style="border: 1px solid gray; border-radius: 10px; padding: 5px; margin: 5px;">01:36</div> <div style="border: 1px solid gray; border-radius: 10px; padding: 5px; margin: 5px;">15:19</div> <div style="border: 1px solid gray; border-radius: 10px; padding: 5px; margin: 5px;">04:42</div> <div style="border: 1px solid gray; border-radius: 10px; padding: 5px; margin: 5px;">08:00</div> <div style="border: 1px solid gray; border-radius: 10px; padding: 5px; margin: 5px;">20:00</div> </div> <p>a) Write the times into the correct part of the table.</p> <table border="1" data-bbox="395 1489 1174 1863" style="width: 100%; border-collapse: collapse;"> <thead> <tr style="background-color: #ADD8E6;"> <th style="width: 50%; text-align: center;">am</th> <th style="width: 50%; text-align: center;">pm</th> </tr> </thead> <tbody> <tr> <td style="height: 150px;"></td> <td style="height: 150px;"></td> </tr> </tbody> </table>	am	pm		
am	pm				

2.

Complete the sentences.

a) 07:45 is quarter to 8 in the _____.

b) 13:40 is twenty to 2 in the _____.

c) _____ is twenty-five past 8 in the morning.

d) _____ is quarter past 7 in the evening.

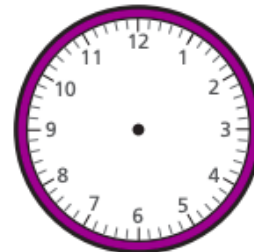
e) 15:45 is quarter to in the _____.

3.

b)



I will go to bed
at 8:00 pm.



Show this time on each clock.

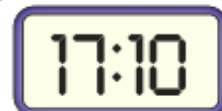
Use 24-hour time on the digital clock.



Challenge!-

Dexter wants to watch a programme at 6:00 pm.

He looks at his clock and it shows this time.



Oh no!
It is 10 past 7,
I have missed it.

Is Dexter correct? _____

Talk about it with a partner.